

International GCSE Mathematics

Formulae sheet – Higher Tier

Arithmetic series

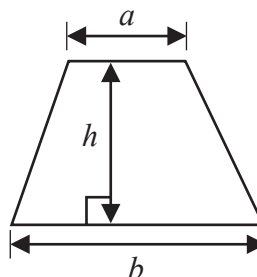
Sum to n terms, $S_n = \frac{n}{2} [2a + (n - 1)d]$

The quadratic equation

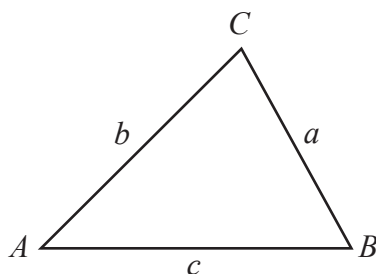
The solutions of $ax^2 + bx + c = 0$ where $a \neq 0$ are given by:

$$x = \frac{-b \pm \sqrt{b^2 - 4ac}}{2a}$$

Area of trapezium = $\frac{1}{2}(a + b)h$



Trigonometry



In any triangle ABC

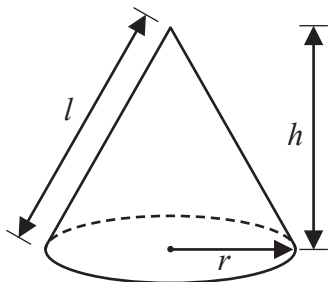
Sine Rule $\frac{a}{\sin A} = \frac{b}{\sin B} = \frac{c}{\sin C}$

Cosine Rule $a^2 = b^2 + c^2 - 2bc \cos A$

Area of triangle = $\frac{1}{2} ab \sin C$

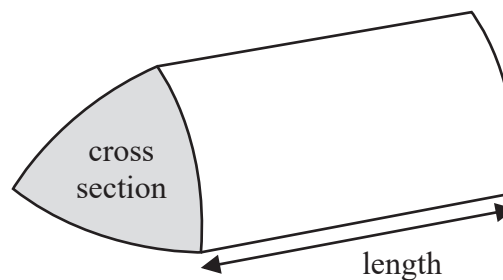
Volume of cone = $\frac{1}{3} \pi r^2 h$

Curved surface area of cone = $\pi r l$



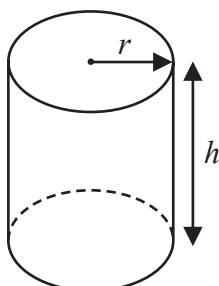
Volume of prism

= area of cross section \times length



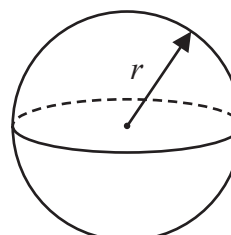
Volume of cylinder = $\pi r^2 h$

Curved surface area of cylinder = $2\pi r h$



Volume of sphere = $\frac{4}{3} \pi r^3$

Surface area of sphere = $4\pi r^2$



DO NOT WRITE IN THIS AREA

DO NOT WRITE IN THIS AREA

DO NOT WRITE IN THIS AREA



DO NOT WRITE IN THIS AREA

DO NOT WRITE IN THIS AREA

DO NOT WRITE IN THIS AREA

Answer ALL TWENTY SIX questions.

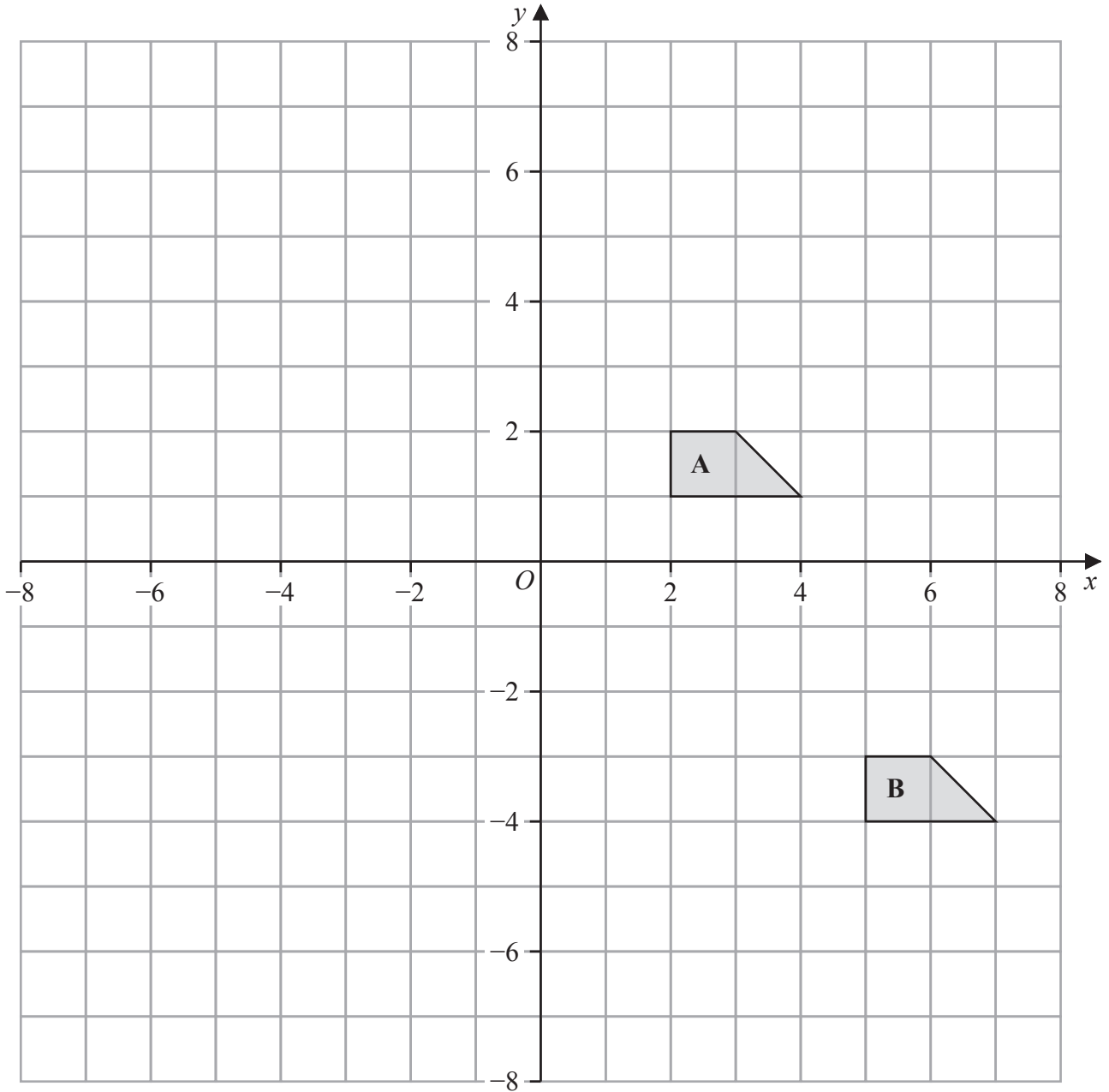
Write your answers in the spaces provided.

You must write down all the stages in your working.

- 1** Write 1400 as a product of powers of its prime factors.
Show your working clearly.

.....
(Total for Question 1 is 3 marks)





- (a) Describe fully the single transformation that maps shape A onto shape B

.....

 (2)

- (b) On the grid above, rotate shape A 180° about $(-1, 0)$
 Label your shape C

(2)

(Total for Question 2 is 4 marks)



DO NOT WRITE IN THIS AREA

DO NOT WRITE IN THIS AREA

DO NOT WRITE IN THIS AREA

3 Here is a list of four numbers written in ascending order of size

x x y 15

where x and y are integers.

The numbers have

- a median of 12.5
- a range of 4

Find the value of x and the value of y

$x =$

$y =$

(Total for Question 3 is 2 marks)



- 4 $\mathcal{E} = \{1, 2, 3, 4, 5, 6, 7, 8, 9, 10\}$
 $A = \{\text{factors of } 6\}$
 $B = \{\text{prime numbers}\}$

(a) List the members of the set

(i) $A \cup B$

.....
 (1)

(ii) A'

.....
 (1)

Harpreet states that $A \cap B = \emptyset$

Harpreet is incorrect.

(b) Explain why.

.....

 (1)

C is a set with 4 members such that

the set $A \cap C$ has 2 members

the set $B \cap C$ has 2 members

Set $A \cap C$ and set $B \cap C$ have no members in common.

(c) List the 4 members of set C

.....
 (2)

(Total for Question 4 is 5 marks)



DO NOT WRITE IN THIS AREA

DO NOT WRITE IN THIS AREA

DO NOT WRITE IN THIS AREA

- 5 The diagram shows the design for a badge, which will be made using wire.
The design is a circle inside a square $ABCD$

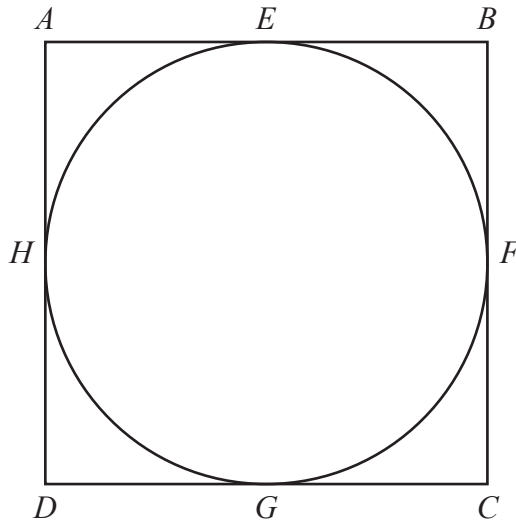


Diagram **NOT**
accurately drawn

The circle touches the square at the points E, F, G and H

The area of the square is 81 cm^2

Calculate the total length of wire that will be needed to make the square and the circle.
Give your answer correct to 3 significant figures.

..... cm

(Total for Question 5 is 4 marks)



6 (a) Solve $\frac{2f}{3} = 4f - 17$

Show clear algebraic working.

$$f = \dots\dots\dots$$

(3)

(b) Simplify $(e + 12)^0$ where $e > 0$

$$\dots\dots\dots$$

(1)

(c) Simplify fully $\frac{12a^4h^6}{4ah^2}$

$$\dots\dots\dots$$

(2)

(d) Factorise fully $20x^5y + 12x^3y^4$

$$\dots\dots\dots$$

(2)

(Total for Question 6 is 8 marks)



DO NOT WRITE IN THIS AREA

DO NOT WRITE IN THIS AREA

DO NOT WRITE IN THIS AREA

7 $\frac{3^{-2} \times 3^5}{3^{10}} = 3^n$

Find the value of n

$n = \dots\dots\dots$

(Total for Question 7 is 2 marks)

8 In a sale, all normal prices are reduced by 17%

The sale price of a fridge is 6225 rupees.

Work out the normal price of the fridge.

$\dots\dots\dots$ rupees

(Total for Question 8 is 3 marks)



9 (a) Write 6.04×10^5 as an ordinary number.

.....
(1)

(b) Write 0.00007 in standard form.

.....
(1)

(c) Work out $\frac{7.6 \times 10^{10}}{4 \times 10^5 - 2 \times 10^4}$

Give your answer in standard form.

.....
(2)

(Total for Question 9 is 4 marks)



DO NOT WRITE IN THIS AREA

DO NOT WRITE IN THIS AREA

DO NOT WRITE IN THIS AREA

10 The diagram shows a hexagon $ABCDEF$

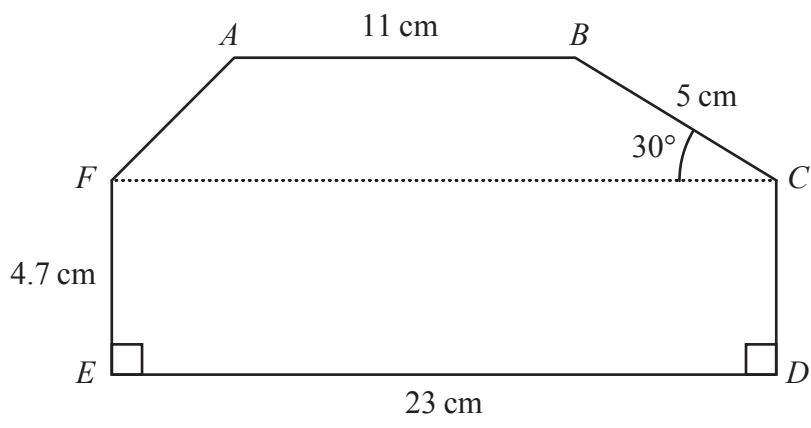


Diagram **NOT** accurately drawn

Angle $BCF = 30^\circ$

AB , FC and ED are parallel.

Calculate the area of $ABCDEF$

Show your working clearly.

..... cm^2

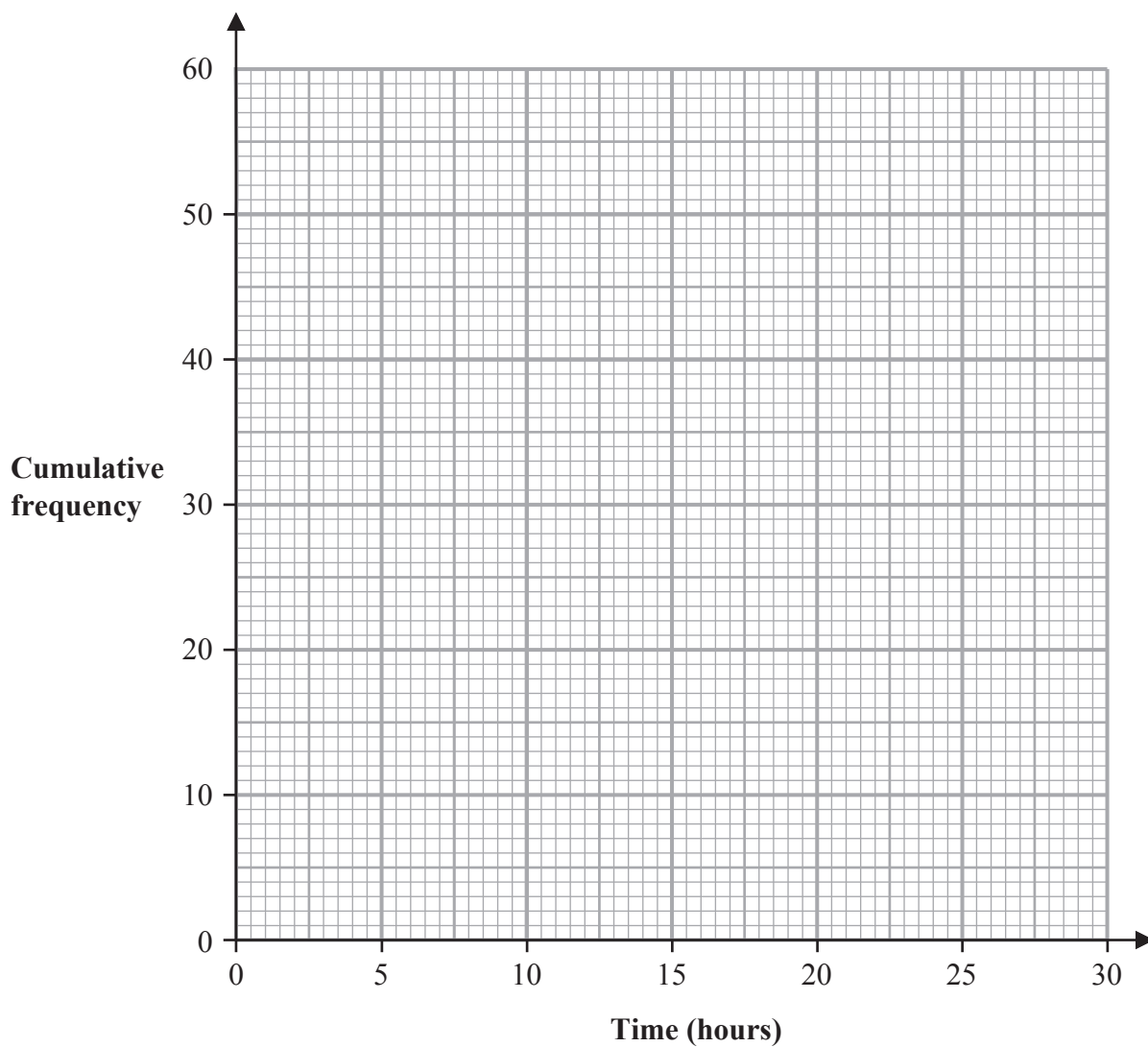
(Total for Question 10 is 5 marks)



- 11 The cumulative frequency table gives information about the time, in hours, that each of 60 workers spent working from home in one week.

Time (t hours)	Cumulative frequency
$0 < t \leq 5$	6
$0 < t \leq 10$	17
$0 < t \leq 15$	27
$0 < t \leq 20$	42
$0 < t \leq 25$	53
$0 < t \leq 30$	60

- (a) On the grid below, draw a cumulative frequency graph for the information in the table.



(2)



(b) Use your graph to find an estimate for the interquartile range of the times.

..... hours
(2)

25 workers spent more than W hours working from home.

(c) Use your graph to find an estimate for the value of W

$W =$
(2)

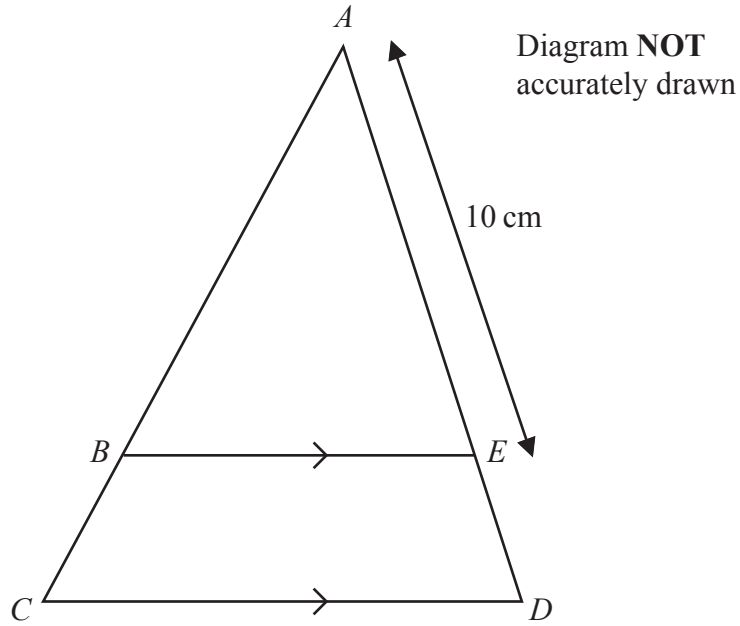
One of the 60 workers is chosen at random.
This worker spent H hours working from home.

(d) Find the probability that $5 < H \leq 10$

.....
(1)

(Total for Question 11 is 7 marks)





In the diagram, ABC and AED are straight lines.
 BE is parallel to CD

$$AE = 10 \text{ cm} \quad \text{and} \quad CD = 1.5 \times BE$$

(a) Work out the length of ED

..... cm
 (2)

$$AB = (2x + 5) \text{ cm} \text{ and } BC = (3x - 5) \text{ cm}$$

(b) Work out the value of x

$x =$
 (2)

(Total for Question 12 is 4 marks)



DO NOT WRITE IN THIS AREA

DO NOT WRITE IN THIS AREA

DO NOT WRITE IN THIS AREA

13 OAB is a sector of a circle with centre O and radius r cm.

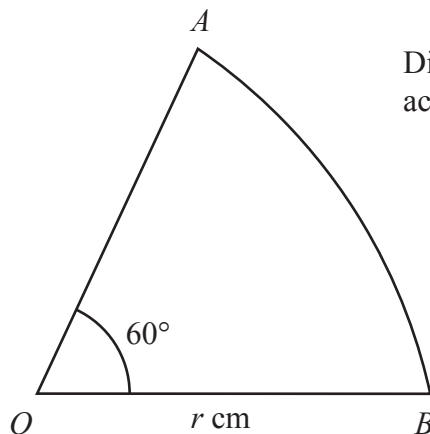


Diagram NOT accurately drawn

Angle $AOB = 60^\circ$

The perimeter of the sector is P cm.

Find a formula for P in terms of r

Give your answer in the form $P = r(c\pi + k)$ where c and k are values to be found.

.....
(Total for Question 13 is 3 marks)



P 7 3 4 7 0 A 0 1 5 3 2

14 Adriana is going to roll a biased dice and spin a biased coin.

The probability that the coin will land on Heads is 0.8

The probability that the dice will land on 6 and the coin will land on Heads is 0.24

Work out the probability that the dice will land on 6 and the coin will land on Tails.

DO NOT WRITE IN THIS AREA

DO NOT WRITE IN THIS AREA

DO NOT WRITE IN THIS AREA

.....
(Total for Question 14 is 3 marks)



15

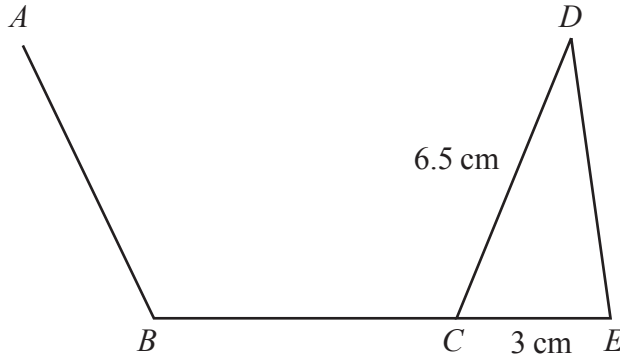


Diagram **NOT** accurately drawn

AB , BC and CD are three sides of a regular pentagon and CDE is a triangle.
 BCE is a straight line.

$$CD = 6.5 \text{ cm} \quad CE = 3 \text{ cm}$$

Work out the area of triangle CDE
Give your answer correct to 3 significant figures.

..... cm^2

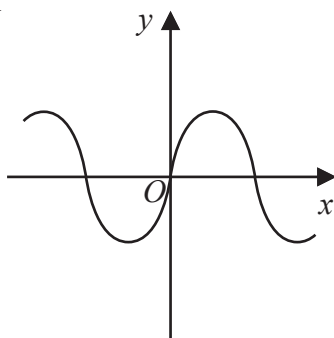
(Total for Question 15 is 3 marks)

DO NOT WRITE IN THIS AREA

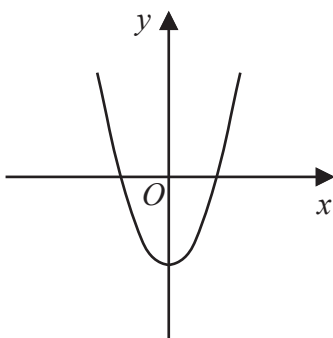


16 Here are six graphs.

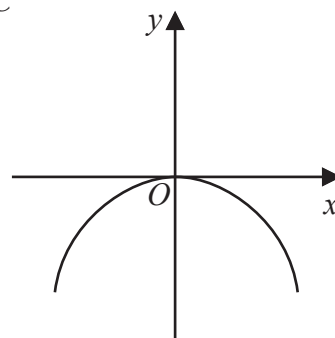
A



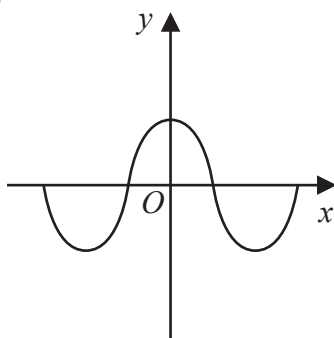
B



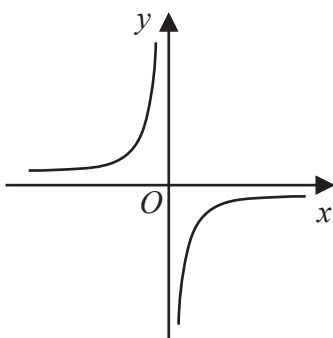
C



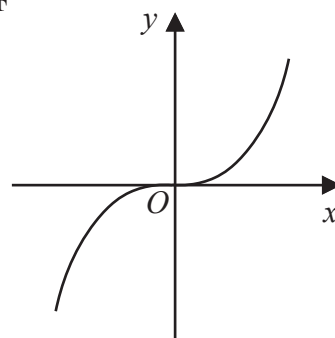
D



E



F



Write down the letter of the graph that could have the equation

(i) $y = -\frac{1}{x}$

.....
(1)

(ii) $y = \sin x^\circ$

.....
(1)

(Total for Question 16 is 2 marks)



DO NOT WRITE IN THIS AREA

17 $f(x) = \frac{x}{2x - 4}$ $g(x) = 3x + 1$

Given that $fg(k) = 2$

work out the value of k

$k = \dots\dots\dots$

(Total for Question 17 is 3 marks)



P 7 3 4 7 0 A 0 1 9 3 2

18 Use algebra to show that $0.\dot{3}0\dot{6} = \frac{34}{111}$

(Total for Question 18 is 2 marks)

DO NOT WRITE IN THIS AREA

DO NOT WRITE IN THIS AREA

DO NOT WRITE IN THIS AREA



DO NOT WRITE IN THIS AREA

DO NOT WRITE IN THIS AREA

DO NOT WRITE IN THIS AREA

19 Aviv goes on a cycle journey.

For the cycle journey

average speed = 19 km/h correct to the nearest whole number

time = 1.5 hours correct to one decimal place

Work out the upper bound for the distance Aviv travels.

Give your answer correct to 3 significant figures.

..... km

(Total for Question 19 is 3 marks)



20 Solve $6x^2 - 7x - 20 > 0$
Show clear algebraic working.

DO NOT WRITE IN THIS AREA

DO NOT WRITE IN THIS AREA

DO NOT WRITE IN THIS AREA

.....
(Total for Question 20 is 4 marks)



DO NOT WRITE IN THIS AREA

DO NOT WRITE IN THIS AREA

DO NOT WRITE IN THIS AREA

21 $ABCD$ is a square.

The point A has coordinates $(-5, 2)$

The point B has coordinates $(3, 5)$

Find an equation of the line that passes through B and C

Give your answer in the form $ax + by + c = 0$ where a , b and c are integers.

.....
(Total for Question 21 is 4 marks)



22 Solve the simultaneous equations

$$x^2 + y^2 = y + 11$$

$$y = 3x - 1$$

Show clear algebraic working.

DO NOT WRITE IN THIS AREA

DO NOT WRITE IN THIS AREA

DO NOT WRITE IN THIS AREA

(Total for Question 22 is 5 marks)



DO NOT WRITE IN THIS AREA

DO NOT WRITE IN THIS AREA

DO NOT WRITE IN THIS AREA

23 A curve has equation $y = f(x)$

The coordinates of the minimum point on this curve are $(6, -3)$

Write down the coordinates of the minimum point on the curve with equation

(i) $y = f(x) + 10$

(.....,)
(1)

(ii) $y = f(3x)$

(.....,)
(1)

(Total for Question 23 is 2 marks)



P 7 3 4 7 0 A 0 2 5 3 2

24 The diagram shows a solid, **S**, made from a cone and a hemisphere.

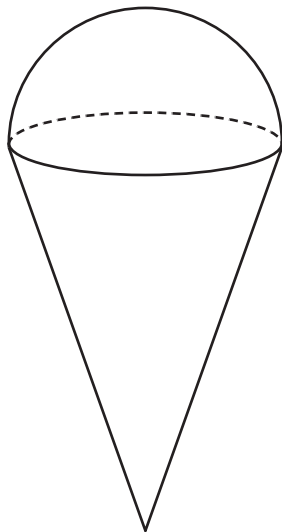


Diagram **NOT**
accurately drawn

The centre of the circular face of the cone coincides with the centre of the flat surface of the hemisphere.

The radius of the circular face of the cone, x cm, is equal to the radius of the hemisphere.

The total height of **S** is $4 \times$ the radius of the hemisphere.

A separate sphere has radius kx cm.

The volume of this sphere is $12.5 \times$ the volume of **S**

(a) Work out the value of k

DO NOT WRITE IN THIS AREA

DO NOT WRITE IN THIS AREA

DO NOT WRITE IN THIS AREA



$$k = \dots\dots\dots (4)$$

A solid, **T**, is similar to solid **S**

The volume of **T** is $512 \times$ the volume of **S**

The total surface area of **T** is $d \times$ the total surface area of **S**

(b) Find the value of d

$$d = \dots\dots\dots (1)$$

(Total for Question 24 is 5 marks)

Turn over for Question 25



25 $OPQR$ is a parallelogram.

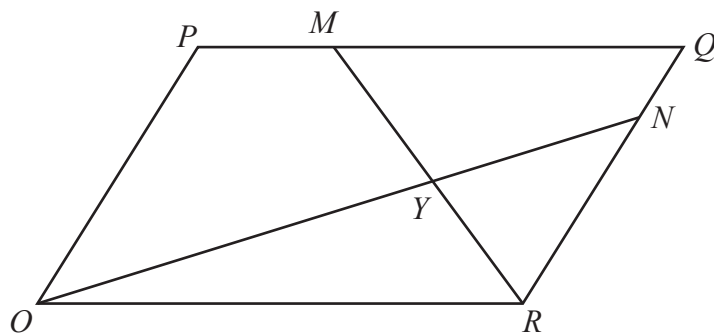


Diagram **NOT** accurately drawn

$\vec{OP} = 2\mathbf{a}$ and $\vec{OR} = 3\mathbf{b}$

The point M lies on PQ such that $PM = \frac{1}{4}PQ$

The point N lies on RQ such that $RN = \frac{4}{5}RQ$

(a) Find, in terms of \mathbf{a} and \mathbf{b} , giving your answers in simplest form

(i) \vec{ON}

.....
(1)

(ii) \vec{MR}

.....
(1)

MR and ON intersect at the point Y

Given that

$$OY = k \times ON$$

(b) use a vector method to find the value of k

DO NOT WRITE IN THIS AREA

DO NOT WRITE IN THIS AREA

DO NOT WRITE IN THIS AREA



DO NOT WRITE IN THIS AREA

DO NOT WRITE IN THIS AREA

DO NOT WRITE IN THIS AREA

$$k = \dots\dots\dots (4)$$

(Total for Question 25 is 6 marks)

Turn over for Question 26



26 Write $4 - \left[(3x - 5) \div \frac{3x^2 + x - 10}{4x - 1} \right]$ as a single fraction in its simplest form.

DO NOT WRITE IN THIS AREA

DO NOT WRITE IN THIS AREA

DO NOT WRITE IN THIS AREA

.....
(Total for Question 26 is 4 marks)

TOTAL FOR PAPER IS 100 MARKS



DO NOT WRITE IN THIS AREA

DO NOT WRITE IN THIS AREA

DO NOT WRITE IN THIS AREA

BLANK PAGE



P 7 3 4 7 0 A 0 3 1 3 2

DO NOT WRITE IN THIS AREA

DO NOT WRITE IN THIS AREA

DO NOT WRITE IN THIS AREA

BLANK PAGE

